

CLASS 4 ---ANSWER KEY FOR CBT DECEMBER TEST-2023

SECTION 1: ENGLISH

READING

I took a little seed, one day, about a month ago. I put it in a pot of soil and hoped that it would grow. I poured a little water, to make the soil right. I put the pot upon the sill, where the sun would give it light. I checked the plant almost every day. So I can really tell that with a little care and water, I helped it grow so well.

Q.1 What did the speaker put in a pot of soil a month ago?

- a) A flower b) A seed c) A tree d) A stone

ANS: A seed

Q.2 Why did the speaker pour water into the pot?

- a) To make the soil right b) To keep away insects
c) To make it colorful d) To cool it down

ANS: a) To make the soil right

WRITING

Q.3 Which part of the plant should be watered?

- a) Stem b) Roots c) Leaves d) Flower

ANS: b) Roots

Q 4. What did the boy make with the trunk of the tree?

- a) boat b) house c) table d) chair

ANS: a) Boat

GRAMMAR

Q5. Fill in the blanks with correct form of verb:

The boy _____ (like/liked) to _____
(eat/ate) the apples of the tree.

- a) like, ate b) liked , ate c) liked, eat d) like , eat

ANS: liked , eat

Q 6. Tick the correct sentence from the following-

- a) The enjoyed tree company of boy the
b) The boy enjoyed the company of tree.
c) The tree company enjoyed the boy of
d) company the boy enjoyed of tree the

ANS: b) The boy enjoyed the company of tree

Q7. FILL IN THE BLANKS WITH CORRECT WORDS FROM BELOW:

A _____ has a number of _____.

- a. branches , leaf b. branch , leaves
c. branches , leaves d. branch , leaf

ANS: b) branch , leaves

SPELLINGS

Q8. Tick the correct spelling

- a) Delisous b) Delisiouc c) Delicious d) Dalicious

ANS: Delicious

Q9. Fill the correct letters to make a meaningful word :

REC ___ GNI ___ E

- a) O, C b) O, S c) A, S d) A, C

ANS: b) O, S

Tick the correct homophone-

Q10. Will you help me to _____ these apples.

- a) cell b) sell c) sale d) sail

ANS: b) sell

SECTION 2: HINDI

पठन

अपठित गद्यांश -

गद्यांश को पढ़कर सही उत्तर चुनो - रक्षाबंधन भाई-बहन के प्यार का प्रतीक त्यौहार है। इस त्यौहार पर बहनें अपने भाइयों की कलाईयों पर राखी बाँधती हैं। यह भाइयों के प्रति बहनों के प्यार और उनकी खुशहाली की प्रतीक होती है।

भाई अपनी बहन की हमेशा रक्षा करने का वचन देता है। राखी सामान्यतः सुनहरे, चमकीले और रेशमी धागे से बनती है।

प्रश्न 1 - भाई बहन के प्यार का प्रतीक त्यौहार है?

1. दीपावली 2. होली 3. रक्षाबंधन 4. ईद

उत्तर- रक्षाबंधन

प्रश्न 2: भाई किसका वचन देता है ?

1. खाने का 2. रक्षा का 3. पढ़ाने का 4. खेलने का

उत्तर- रक्षा का

प्रश्नों के सही उत्तर चुनो

प्रश्न 3- 'थप्प रोटी थप्प दाल' नाटक में बच्चे कौन सा खेल खेल रहे हैं?

1. गुल्ली डंडा 2. क्रिकेट 3. लूडो 4. घर-घर

उत्तर- घर-घर

प्रश्न 4. गांधीजी दांडी यात्रा पर क्यों जा रहे थे?

1. सत्याग्रह के लिए 2. लड़ने 3. शादी में 4. घूमने

उत्तर- सत्याग्रह के लिए

व्याकरण

प्रश्न 5. "चट कर जाना" मतलब क्या होता है?

1. खा जाना 2. पीटना 3. खेलना 4. सो जाना

उत्तर- खा जाना

प्रश्न 6. माँ का सही पर्यायवाची शब्द चुनिये

1. भ्रात्र 2. माता 3. पिताजी 4. भगिनी

उत्तर- माता

प्रश्न 7. तरकारी का बहुवचन क्या होता है?

1. सब्जियाँ 2. राशन 3. तरकारियाँ 4. भाजीयाँ

उत्तर- सब्जियाँ

वर्तनी

प्र. 8 - वर्तनी की दृष्टि से सही शब्द चुनो

1. चूलहा 2. चूला 3. चूल्हा 4. चुल्हा

उत्तर- चूल्हा

प्र. 9 - सही क्रिया शब्द बताओ ?

1. दही 2. फेंटना 3. फीका 4. रई

उत्तर- फेंटना

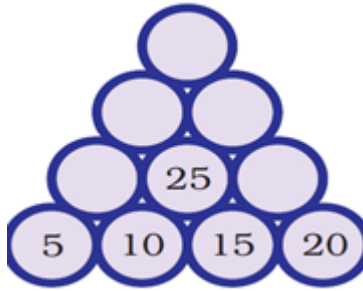
प्र. 10 - स्वतंत्र का विलोम है -

1. मुक्त 2. आज़ाद 3. गुलामी 4. स्वतन्त्रता

उत्तर- गुलामी

SECTION 3: MATHS

Q.1 Which number will be on top of this number tower-



- a) 90 b) 100 c) 110 d) 120

Answer- b) 100

FEEDBACK: Second line from bottom— $5+10=15$, $10+15=25$, $15+20=35$

Third line from bottom – $15+25=40$, $25+35=60$

Fourth line on top – $40+60=100$

Q.2 What will come next- A, C, F, J, O, ____

- a) T b) U c) V d) W

Answer- b) U

FEEDBACK: After A- skip 1 letter comes C, then skip 2 letters comes F, then skip 3 letters

gives J, skip 4 letters gives O, SO now skipping 5 letters after O will give answer U

Q.3 What will come next- 1, 4, 9, 16, ____

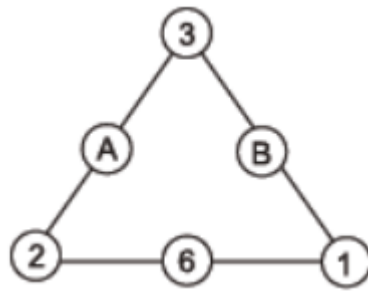
- a) 20 b) 25 c) 30 d) 36

Answer- b) 25

FEEDBACK: Here after each number skip numbers in multiples of 2 --- 1(2,3) 4, (5,6,7,8) 9

(10,11,12,13,14,15) 16 (17, 18, 19, 20, 21, 22, 23,24) SO NOW ANSWER IS 25

Q.4 Find out A and B so as to make SUM equal on each side of this triangle-

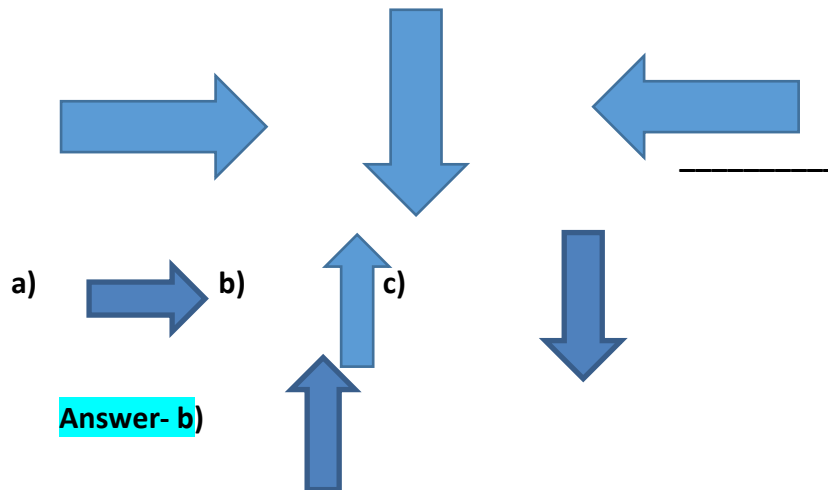


- a) A=2, B=3 b) A=3, B=4 c) A=4, B=5 d) A=3 b= 5

Answer- c) A=4, B=5

FEEDBACK--- Horizontal line— $2+6+1=9$, $2+3=5$ $+4=9$ So **A=4** $3+1=4$ $+5=9$ So **B=5**

Q.5 What will come next-



Answer- b)

Q.6 If A=1, B=2, C=3 and so on then decode this secret message



- a) WALK b) FISH c) JUMP d) LION

Answer- c) JUMP

FEEDBACK: As per alphabet $10=J$, $21=U$, $13=M$, $16=P$

Q.7 If we change the rule and write 1 in place of 'B', 3 in place of 'D' and so on, then how will we write 'HELLO'?

- a) 7 4 11 11 14 b) 8 5 12 12 15 c) 7 4 12 12 15 d) 8 5 11 11 14

Answer- a) 7 4 11 11 14

FEEDBACK: Starting from B and counting odd numbers for alternate letters B-1, D-3, F-5, H-7, J-9 and so on..... H=7, E=4, L=11, O=14 so the **Answer is 7,4,11,11,14**

Q.8 If we have changed each letter by its next letter. That is, we write 'G' in place of 'F', 'O' in place of 'N'. So YES becomes-

- a) ZET b) ZFS c) ZFT d) ZES

Answer- c) ZFT

FEEDBACK: Next letter of Y is Z, for E it's F, S-T, so the **Answer is ZFT**

Q.9 What will come next- 2, 4, 8, 16, _____

- a) 20 b) 24 c) 28 d) 32

Answer- d) 32

FEEDBACK: Numbers are written by multiplying each number by 2---

$2 \times 2 = 4$ $4 \times 2 = 8$ $8 \times 2 = 16$ SO $16 \times 2 = 32$

Q.10 Which letter will look same after half a turn-

- a) K b) L c) M d) N

Answer- d) N

FEEDBACK: By turning letter N by 180 degrees we again get N....so the **Answer is N**

SECTION 4: EVS

Observation and Reporting



1. Name the above picture

- a. Dam b) canal c) river d) ocean

Ans: dam




2. Name the above water activity:

- a. swimming b. snuba diving c. rowing d. wind-surfing

ANS: Rowing

3. What are ways to purify water?



- a. filter through cloth b) filter through filter paper
b. filter through charcoal c) all of these

ANS: All of these

Q4. Sea water contains?

- a) salt b) sugar c) oil d) all of these

ANS: a) Salt

Identification and classification

5. What was near bazar gaon?

- a. school b. water park c. hospital d. temple

ANS: Water park

6. In the chapter 'TOO MUCH WATER, TOO LITTLE WATER', the children panchayat was called :

- a. Bhima sangh b. Bhama singh c. Kids panchayat d. Funny panchayat

Ans: Bhima sangh

Q7) The children were sliding down a tall slide in a water park and landed –

- a). on grass b). in water c) in river d.) on floor

ANS: in water

DISCOVERY OF FACTS

Q8. The full form of ORS is:

- a) Oral Retention Solution b) Oral Rehydration Solution
c) Oral Retest Solution d) None of these

ANS: b) Oral Rehydration Solution

Q9. The ingredients required to prepare ORS are:

- a) A glass full sugar, a pinch of water, a spoon salt
b) A glass full water, a pinch sugar, a spoon full salt
c) A glass full of water, a spoon full sugar, a pinch salt
d) A glass full of salt, a spoon salt, a pinch of sugar

ANS: c) A glass full of water, a spoon full sugar, a pinch salt

Q10. When we start vomiting and have loose motions, we suffer from which disease?

- a) Malaria b) Diarrhoea c) Typhoid d) Corona

ANS: b) Diarrhoea